

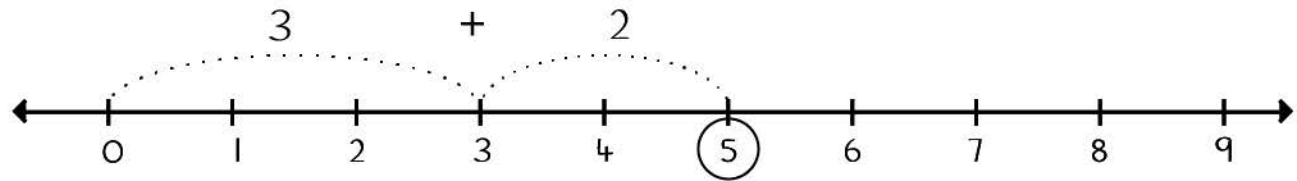
Name _____

Date _____


Use the number-line to find the answers to the addition exercise below.

The first example is completed for you.


$$3 + 2 = \boxed{5}$$



$$5 + 1 = \boxed{}$$



$$1 + 4 = \boxed{}$$




$$6 + 2 = \boxed{}$$



$$2 + 7 = \boxed{}$$



$$6 + 2 = \boxed{}$$



$$3 + 1 = \boxed{}$$

