


Name _____

Date _____

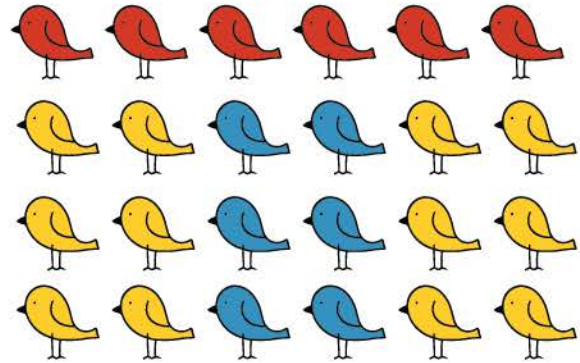
Count and Add

Count the number of items in each section by their colors and write the number down. Add and write the sum.




$$\square + \square + \square = \square$$

Green Brown Black




$$\square + \square + \square = \square$$

Red Yellow Blue



$$\square + \square + \square = \square$$

Red Green Yellow



$$\square + \square + \square = \square$$

Blue Green Pink