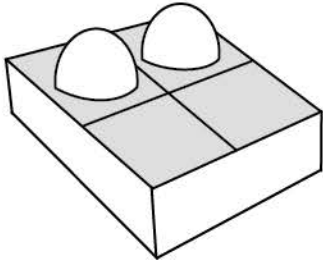


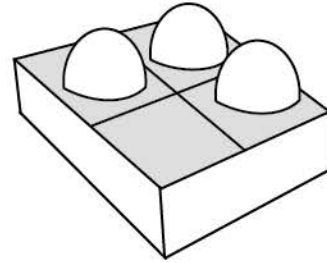
Name \_\_\_\_\_

Date \_\_\_\_\_

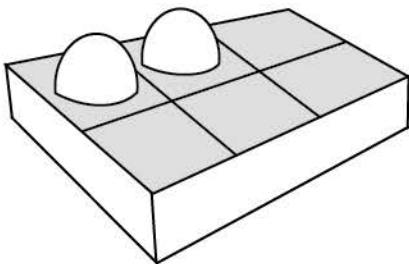
How many more do I need?



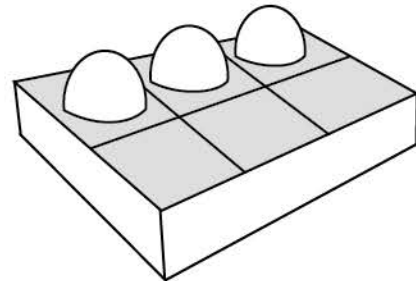
$$2 + \underline{\quad} = 4$$



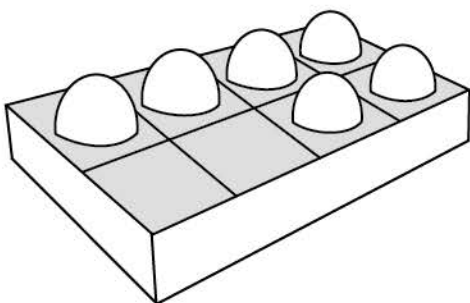
$$3 + \underline{\quad} = 4$$



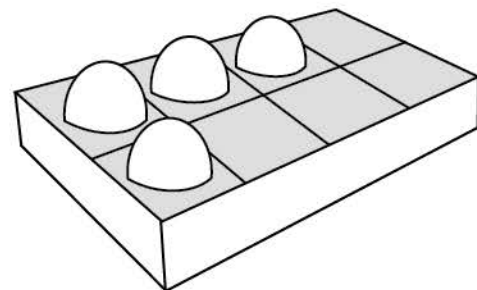
$$2 + \underline{\quad} = 6$$



$$3 + \underline{\quad} = 6$$



$$6 + \underline{\quad} = 8$$



$$4 + \underline{\quad} = 8$$