
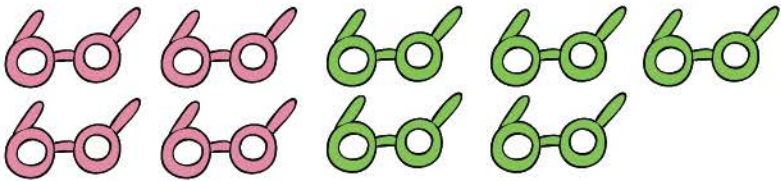
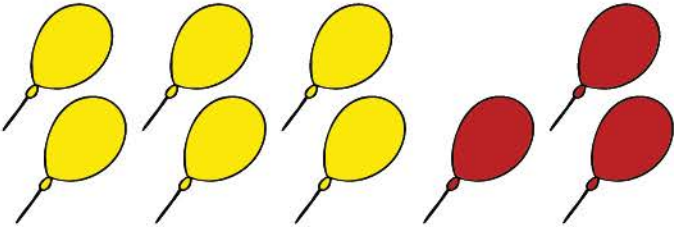
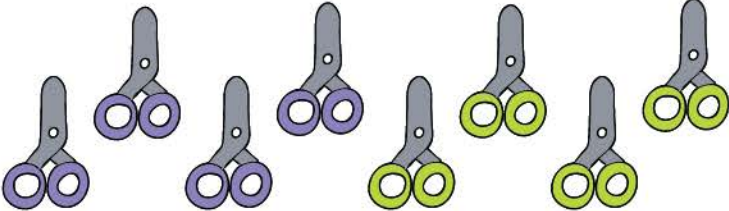




Name _____

Date _____

Addition

Each group below has different colors of an object. Count each set and write them down.
Find the sum of the numbers by counting all the objects together in the group.

	$\underline{\quad} + \underline{\quad} = \underline{\quad}$
	$\underline{\quad} + \underline{\quad} = \underline{\quad}$
	$\underline{\quad} + \underline{\quad} = \underline{\quad}$
	$\underline{\quad} + \underline{\quad} = \underline{\quad}$
	$\underline{\quad} + \underline{\quad} = \underline{\quad}$
	$\underline{\quad} + \underline{\quad} = \underline{\quad}$