

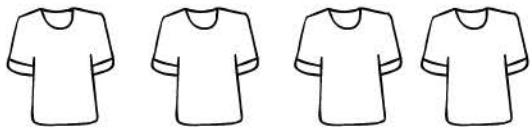
Name_____

Date_____

Addition


In addition, you can obtain the same result (sum) by adding different numbers.
Try the exercise below.

How many brown shirts and blue shirts
make 4 shirts?



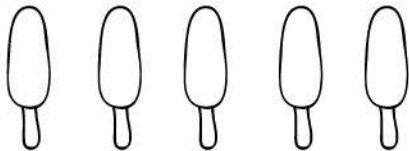
$$4 = 3 + 1$$

How many brown shirts and blue shirts
make 4 shirts?




$$4 = 2 + 2$$

How many pink popsicles and orange
popsicles make 5 popsicles?



$$5 = 2 + 3$$

How many pink popsicles and orange popsicles
make 5 popsicles?



$$5 = 4 + 1$$

How many red whistles and green
whistles make 3 whistles?



$$3 = 2 + 1$$

How many red whistles and green whistles
make 3 whistles?



$$3 = 3 + 0$$