



Name _____

Date _____


Count backwards and write the missing numbers.



| | | | | |
|----|---|---|--|---|
| 10 | 9 | | | 6 |
| 5 | | 3 | | 1 |



| | | | | |
|----|---|---|---|---|
| 10 | | 8 | | |
| | 4 | | 2 | 1 |



| | | | | |
|---|---|---|---|--|
| | 9 | | 7 | |
| 5 | | 3 | | |