

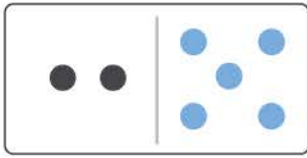
Name _____

Date _____

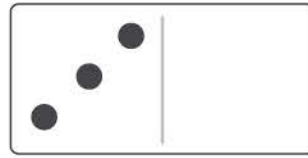
Draw and Add Domino Dots

In the sets of dominos below, draw dots on each card to make 7. Write the addition sentence below it.

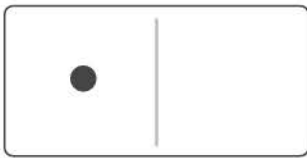
Example:




$$\underline{2} \text{ dots} + \underline{5} \text{ dots} = \underline{7} \text{ dots}$$




$$\underline{\quad} \text{ dots} + \underline{\quad} \text{ dots} = \underline{\quad} \text{ dots}$$




$$\underline{\quad} \text{ dots} + \underline{\quad} \text{ dots} = \underline{\quad} \text{ dots}$$




$$\underline{\quad} \text{ dots} + \underline{\quad} \text{ dots} = \underline{\quad} \text{ dots}$$




$$\underline{\quad} \text{ dots} + \underline{\quad} \text{ dots} = \underline{\quad} \text{ dots}$$



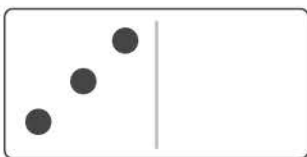
$$\underline{\quad} \text{ dots} + \underline{\quad} \text{ dots} = \underline{\quad} \text{ dots}$$



$$\underline{\quad} \text{ dots} + \underline{\quad} \text{ dots} = \underline{\quad} \text{ dots}$$



$$\underline{\quad} \text{ dots} + \underline{\quad} \text{ dots} = \underline{\quad} \text{ dots}$$



$$\underline{\quad} \text{ dots} + \underline{\quad} \text{ dots} = \underline{\quad} \text{ dots}$$



$$\underline{\quad} \text{ dots} + \underline{\quad} \text{ dots} = \underline{\quad} \text{ dots}$$