


Name _____

Date _____

The Clock — Quarter Past

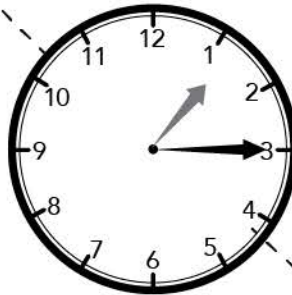
Draw lines to connect the different ways of telling the time.

Quarter past 1



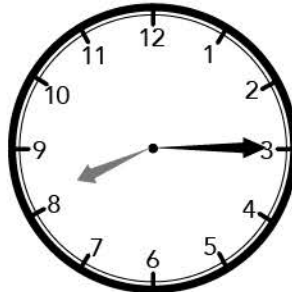
7:15

Quarter past 7



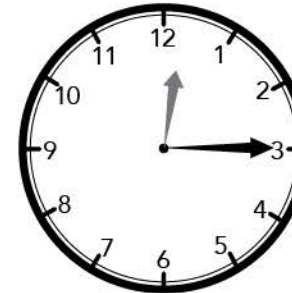
8:15

Quarter past 11



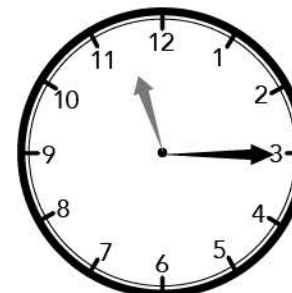
1:15

Quarter past 8



11:15

Quarter past 12



12:15