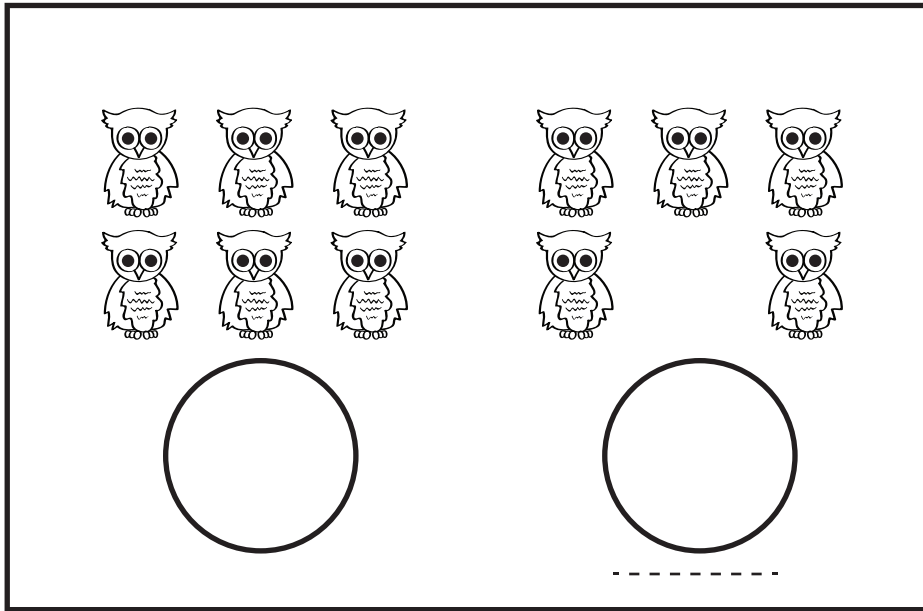


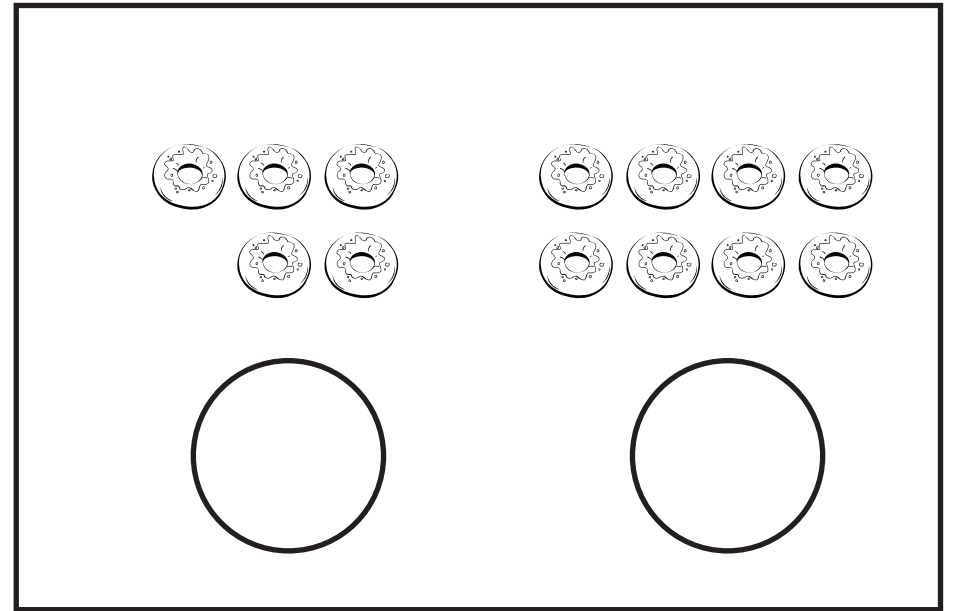
Activity: Which number is less?

Each box has two sets of items. Count them aloud and write the numbers in the circle below them.


Draw a line under the number which is less.




A rectangular box containing two groups of owls. The left group has 6 owls arranged in two rows of three. The right group has 5 owls arranged in two rows: the top row has 3 owls and the bottom row has 2 owls. Below each group is a large empty circle for writing the count. A dashed line is positioned below the circle on the right.



A rectangular box containing two groups of donuts. The left group has 5 donuts arranged in two rows: the top row has 3 donuts and the bottom row has 2 donuts. The right group has 8 donuts arranged in two rows of four. Below each group is a large empty circle for writing the count.



A rectangular box containing two groups of sailboats. The left group has 5 sailboats arranged in two rows: the top row has 3 sailboats and the bottom row has 2 sailboats. The right group has 4 sailboats arranged in two rows of two. Below each group is a large empty circle for writing the count.



A rectangular box containing two groups of trees. The left group has 3 trees in a single row. The right group has 6 trees arranged in two rows of three. Below each group is a large empty circle for writing the count.

Name _____