


Name \_\_\_\_\_

Date \_\_\_\_\_


### Subtraction — Taking from.

Count the group of animals below. Circle out the animals that moved from the group and write down the number of the remaining animals.



There are 5 bugs. 2 flew away = There are \_\_\_\_\_ bugs now

---



There are 4 birds. 1 flew away = There are \_\_\_\_\_ birds now

---



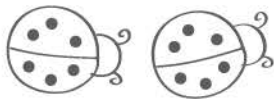
There are 4 butterflies. 2 flew away = There are \_\_\_\_\_ butterflies now

---



There are 5 ducks. 3 walked away = There are \_\_\_\_\_ ducks now

---



There are 2 ladybugs. 2 flew away = There are \_\_\_\_\_ ladybugs now

---



There are 4 owls. 0 flew away = There are \_\_\_\_\_ owls now