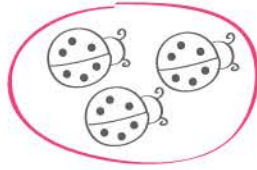
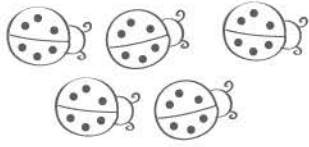


Name _____


Date _____

Subtraction — Taking from.



Count the group of animals below. Circle out the animals that moved from the group and write down the number of the remaining animals.



There are 8 ladybugs. 3 flew away = There are ___ ladybugs now





There are 6 frogs. 2 jump away = There are ___ frogs now




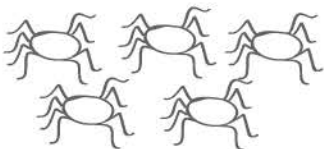
There are 7 turtles. 4 walk away = There are ___ turtles now



There are 6 snails. 4 move away = There are ___ snails now



There are 8 pigs. 2 walked away = There are ___ pigs now



There are 9 spiders. 4 walked away = There are ___ spiders now