

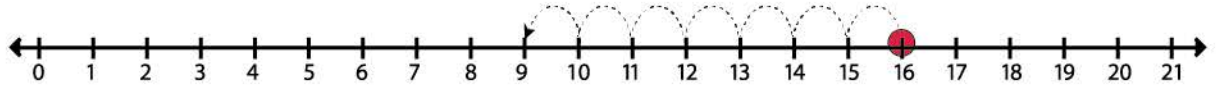
Name _____

Date _____

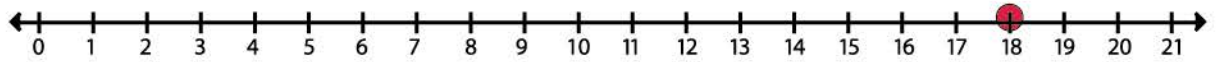
Subtraction

Use the number-line to find the answers to the subtraction exercise below.

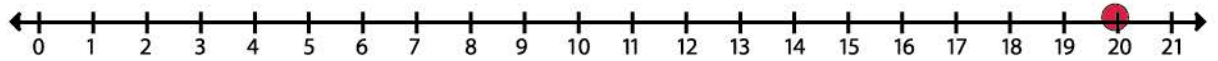
$16 - 7 = \square$



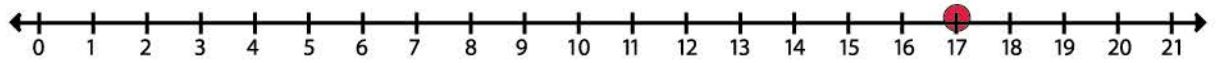
$18 - 5 = \square$



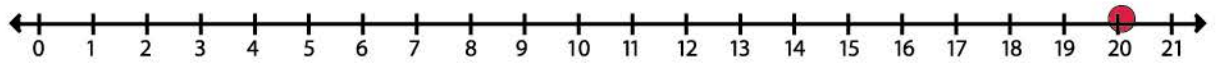
$20 - 2 = \square$



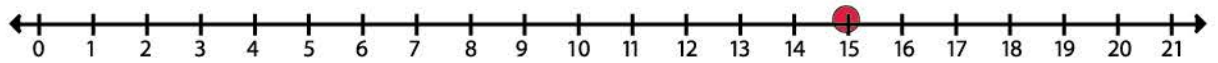
$17 - 5 = \square$



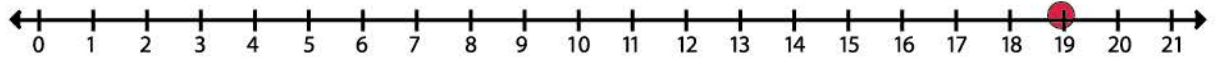
$20 - 6 = \square$



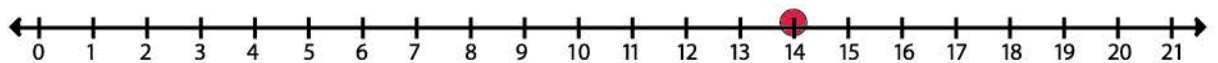
$15 - 4 = \square$



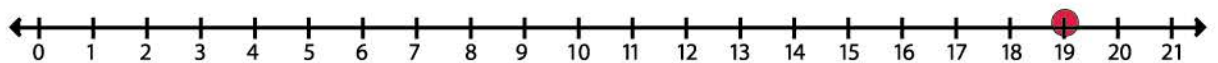
$19 - 8 = \square$



$14 - 6 = \square$



$19 - 9 = \square$



$16 - 8 = \square$

