

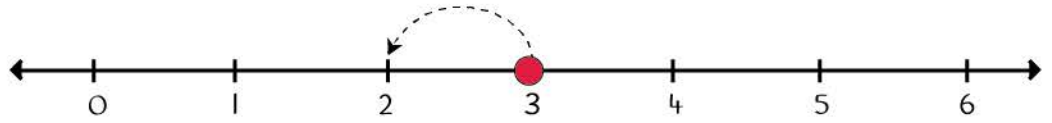
Name _____

Date _____

Subtraction

Use the number-line to find the answers to the subtraction exercise below.

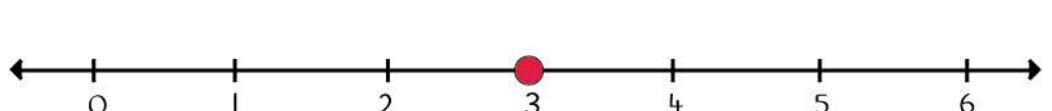
$3 - 1 = \square$



$5 - 2 = \square$



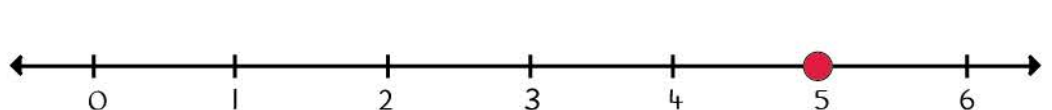
$3 - 2 = \square$



$6 - 3 = \square$



$5 - 1 = \square$



$6 - 4 = \square$

