

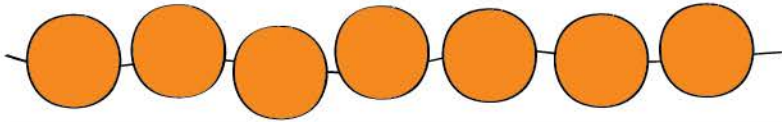
Name _____

Date _____

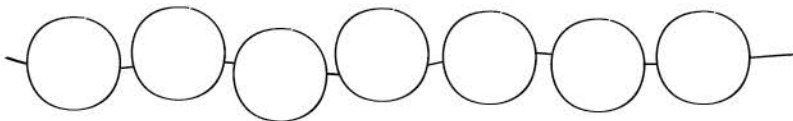
Adding to 7

Color the circles to show more ways to make 7.

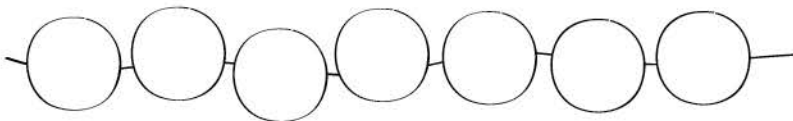
Use   to complete the addition sentences.



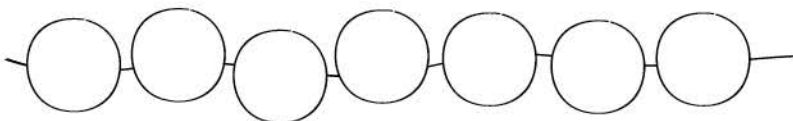
$$7 = \underline{7} + \underline{0}$$



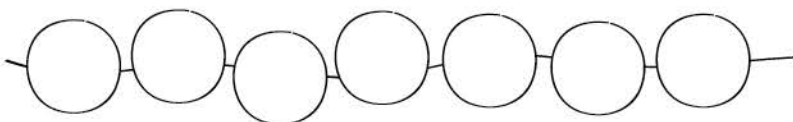
$$7 = \underline{\quad} + \underline{\quad}$$



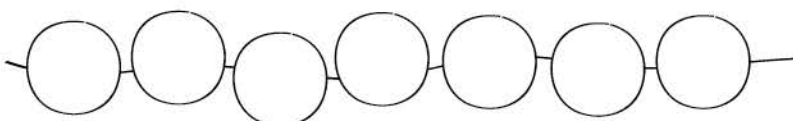
$$7 = \underline{\quad} + \underline{\quad}$$



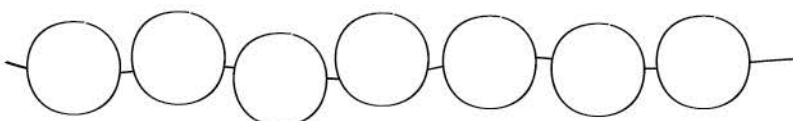
$$7 = \underline{\quad} + \underline{\quad}$$



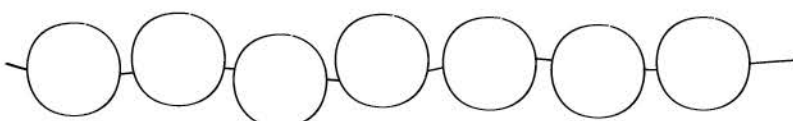
$$7 = \underline{\quad} + \underline{\quad}$$



$$7 = \underline{\quad} + \underline{\quad}$$



$$7 = \underline{\quad} + \underline{\quad}$$



$$7 = \underline{\quad} + \underline{\quad}$$