

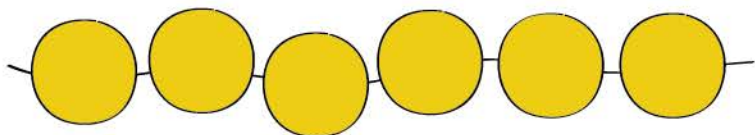
Name _____

Date _____


Adding to 6

Color the circles to show more ways to make 6.

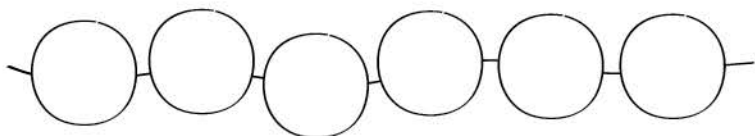
Use   to complete the addition sentences.




$$6 = \underline{6} + \underline{0}$$



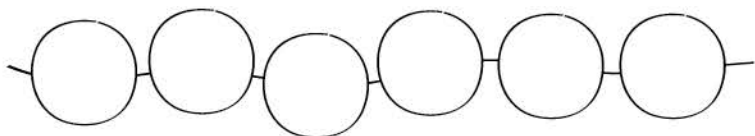
$$6 = \underline{\quad} + \underline{\quad}$$



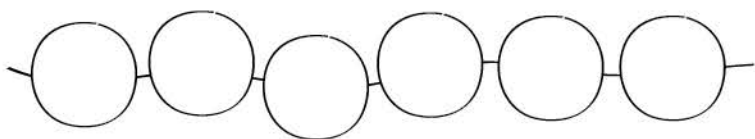
$$6 = \underline{\quad} + \underline{\quad}$$



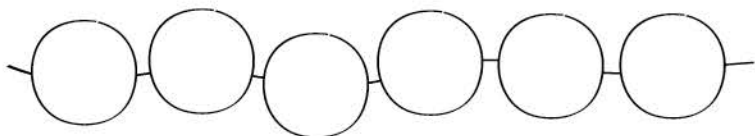
$$6 = \underline{\quad} + \underline{\quad}$$



$$6 = \underline{\quad} + \underline{\quad}$$



$$6 = \underline{\quad} + \underline{\quad}$$



$$6 = \underline{\quad} + \underline{\quad}$$