

Name \_\_\_\_\_

Date \_\_\_\_\_

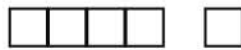

## How many?

Draw  and color to show adding.


There are 7 bunnies in the garden. 2 more bunnies join them.  
How many bunnies are there?

\_\_\_\_\_ + \_\_\_\_\_ = \_\_\_\_\_ bunnies

Circle the picture that shows  $2 + 2 = 4$



Circle the addition model that represents the cubes.



$$2 + 3 = 5$$

$$4 + 3 = 7$$

Circle the picture that shows  $5 + 3 = 8$

