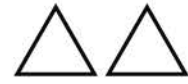








Name \_\_\_\_\_

Date \_\_\_\_\_

Use the groups in the picture code below to complete the addition sentences.



How many?

	_____ + _____ = _____ in all
	_____ + _____ = _____ in all
	_____ + _____ = _____ in all
	_____ + _____ = _____ in all

Challenge Activity

What is the sum of 3 and 6?

2      4      9      3  
○      ○      ○      ○

What is the sum of 5 and 3?

8      7      1      5  
○      ○      ○      ○